

ECE 4070, Spring 2017
 Physics of Semiconductors and Nanostructures
 Handout 4070

Contents	
----------	--

4070.HW 1	1
4070.HW 2	4
4070.HW 3	6
4070.HW 4	10

Problems

Present your solutions *neatly*. Do not turn in rough unreadable worksheets - learn to **take pride in your presentation**. Show the relevant steps, so that partial points can be awarded. BOX your final answers where applicable. Draw figures wherever necessary. Always provide the analytical answer before finding numerical values. **Please print out the question sheet(s) and staple to the top of your homework.** Write your name, email address, and date/time the assignment is turned in on the cover. Assignments must be turned in before class on the due date. The time the assignment is turned in should be written. There will be a 10% penalty each day of delay, and assignments will not be accepted beyond 3 days after the due date. There will be no exceptions to this rule. You are allowed to work with other students in the class on your homeworks. The name(s) of the student(s) you worked with must be included in your homework. But what you turn in must be in your *own* writing, and have your *own* plots and figures. Turning in plots/figures/text that are exact replicas of others *is considered cheating*.

4070.1 HW 1

Posted: 02/04/2017, Due: 02/13/2017

Problem 1: Semiconductor History

Write a short <1-page critique of the paper “The History of Semiconductors” handed out in class.

Problem 2: Mirror Mirror on the Wall

Believe it or not, coating glass with metal to make make a mirror was a *big* technological breakthrough back in the time ¹. In this problem, we answer why metals are shiny - why they reflect most of the visible light incident on them. Not surprisingly, this has to do with the conduction electrons in the metal. Here is our mode of attack: when the light wave experiences a mismatch in the refractive index, part of it is transmitted, and part reflected. So we will ask Maxwell’s equations to give us the reflection coefficient when a light beam is incident from air on a metal. If we find that this reflection coefficient is very high for visible wavelengths, we have succeeded in explaining why metals are shiny.

The reflection coefficient Γ_r will depend on the refractive index $\sqrt{\epsilon(\omega)}$ of the metal, which in turn will depend on how the conduction electrons respond to the oscillating electric field of the light beam. This is where Drude’s free electron model of the metal - the same model that explained electrical and thermal conductivity - will help us through.

Figure 4070.1 shows the measured reflectance of three common metals as a function of the wavelength of light incident on it. Your job in this problem is to calculate and make your own plot by standing on Maxwell, Drude, and Newton’s shoulders. If things go right,

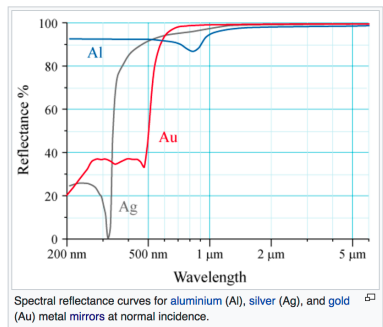


Fig. 4070.1: Reflectance spectra of three metals from Wikipedia

¹Quite possibly marking the birth of fashion?

you may even explain the dips and wiggles in figure 4070.1. I will roughly outline the method and trust you can finish the story:

The electric field of the light beam according to Maxwell oscillates in time as $E(t) = E_0 e^{i\omega t}$, where E_0 is the amplitude, and $\omega = 2\pi f$ is the radial frequency, $f = c/\lambda$ with c the speed of light, and the wavelength λ of light is the x -axis in the plot. The reflection

coefficient for light is $\Gamma_r = \frac{E_r}{E_i} = \frac{\sqrt{\epsilon_0} - \sqrt{\epsilon(\omega)}}{\sqrt{\epsilon_0} + \sqrt{\epsilon(\omega)}}$, where $\sqrt{\epsilon}$ is the refractive index of the

media. The reflectance is $R = |\Gamma_r|^2$, which can be found for various wavelengths; this is the y -axis of the plot. Note that all symbols have their usual meanings.

(a) From Maxwell's equation $\nabla \times \mathbf{H} = \mathbf{J} + i\omega\epsilon_0\mathbf{E}$ in material media, show that the dielectric constant of the metal is $\epsilon(\omega) = \epsilon_0 \left[1 + i \frac{\sigma(\omega)}{\omega\epsilon_0} \right]$.

(b) Now if you have the frequency-dependent conductivity $\sigma(\omega)$, you can make your plot by looking up the properties of the metal! But we have only covered the DC Drude model for conductivity in class, where we obtained $\sigma(0) = \frac{nq^2\tau}{m_e}$. Here you need to use Newton's laws again and solve to show the following:

$$qE_0 e^{i\omega t} = m_e \frac{dv}{dt} - \frac{m_e v}{\tau} \implies \sigma(\omega) = \frac{\sigma_0}{1 - i\omega\tau} = \underbrace{\frac{\sigma_0}{1 + (\omega\tau)^2}}_{\text{Re}(\sigma(\omega))} + i \underbrace{\frac{\omega\tau\sigma_0}{1 + (\omega\tau)^2}}_{\text{Im}(\sigma(\omega))}. \quad (4070.1)$$

(c) Now you are close to the finish line. Use the above modified Drude ac conductivity, look up the required properties of the three metals, and plot the reflectances of all the three metals. Compare with figure 4070.1.

Problem 3: Lord of the Ring

We derived in class that the allowed wavefunctions representing an electron on a circular ring of circumference L is $\psi_n(x) = \frac{1}{\sqrt{L}} e^{ik_n x}$, where $k_n = \frac{2\pi}{L} n$ are *quantized* because $n = 0, \pm 1, \pm 2, \dots$. The *angular momentum* of a particle is defined as $\mathcal{L} = \mathbf{r} \times \mathbf{p}$, where \mathbf{r} is the 'radius' of the circle, and \mathbf{p} is the linear momentum.

(a) Show that the angular momentum of an electron in state $\psi_n(x)$ is $\mathcal{L}_n = n\hbar$, where $\hbar = \frac{h}{2\pi}$ is the 'reduced' Planck's constant. This implies that the angular momentum is *quantized* to values $0, \pm\hbar, \pm 2\hbar, \dots$. Compare the quantized angular momentum \mathcal{L}_1 for $n = +1$ with the classical angular momentum \mathcal{L}_{cl} of a mass $m = 1$ kg being spun by a string of length $R = 1$ m with tangential velocity $v = 1$ m/s to appreciate how 'nano' is the quantum of angular momentum.

(b) By balancing the classical centrifugal force and the electromagnetic Lorentz force, show that for an electron to be in the quantum state $\psi_n(x)$ on the ring, we need a *magnetic* field B_n such that the magnetic flux is $\Phi_n = B_n \cdot A = n \times \frac{h}{2e}$. Here A is the area of the ring, e is the electron charge and $h = 2\pi\hbar$. $\Phi_0 = \frac{h}{2e}$ is known as the *quantum of magnetic flux*, and has been measured experimentally in nanostructured rings.

(c) Consider the quantum state obtained by the superposition $\psi(x) = a[\psi_{n=1}(x) + \psi_{n=-1}(x)]$ from the eigenstates of the electron on the ring. Normalize the state to find the constant a . You may need the result $\int_0^L \cos^2\left(\frac{2\pi}{L}x\right) dx = \frac{L}{2}$. Does this superposition state have a definite momentum?

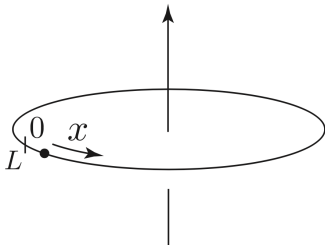


Fig. 4070.2: Electron on a ring

(d) We derived that the quantum expression for current flux is $\mathbf{j} = \frac{1}{2m}(\psi^* \hat{\mathbf{p}} \psi - \psi \hat{\mathbf{p}} \psi^*)$, where $\hat{\mathbf{p}} = -i\hbar \nabla$ is the momentum operator, which takes the form $\hat{p}_x = -i\hbar \frac{\partial}{\partial x}$ for the particle on the ring. Show that even though the states $\psi_{n=1}(x)$ and $\psi_{n=-1}(x)$ carry *net* currents, their superposition state of part (c) does not. Explain.

Problem 4: Born to be free

We discussed in class that because of the Pauli exclusion principle, Fermions must follow the Fermi-Dirac distribution, and they have half-integer spins. Now imagine we have a metal with $n = 10^{23}/\text{cm}^3$ electrons in a cubic box of side L , and we know that electrons are Fermions. Assume the electrons are completely free to move around in the box, meaning there are no atoms in their way. If that that much freedom is not enough for you, how about this: completely neglect the Coulomb interactions due the charge of the electrons!² Find the following at $T = 0\text{K}$:

- The Fermi wavevector k_F .
- The Fermi momentum p_F .
- The Fermi energy E_F .
- The *average* energy of electrons $u = \frac{U}{N}$. What is the origin of this energy?
- What is the average energy of the electrons if they did not follow quantum mechanics, but were subject to classical mechanics?

Problem 5: Graphene Density of States, Fermi-Dirac distribution

The electrons in the conduction band of graphene are free to move in 2-dimensions, forming a 2-dimensional electron gas (2DEG). The energy-momentum dispersion relationship for the 2DEG electrons in graphene is $E(k_x, k_y) = \hbar v_F \sqrt{k_x^2 + k_y^2}$, where v_F is a parameter with dimensions of velocity. For graphene, it is $v_F = 10^8 \text{cm/s}$.

- Make a sketch of the energy as a function of the (k_x, k_y) points in the 2D k -space plane, and show that the dispersion results in a conical shape.
- Show that the density of states for these electrons is $g(E) = \frac{g_s g_v}{2\pi(\hbar v_F)^2} |E|$, where $g_s = 2$ is the spin degeneracy of each (k_x, k_y) state, and g_v is the number of cones in the energy dispersion. For graphene, $g_v = 2$.
- Show that at thermal equilibrium, when the Fermi level is at $E_f = 0$, the number of conduction electrons per unit area in 2D graphene is $n_i = \frac{\pi}{6} \left(\frac{kT}{\hbar v_F}\right)^2$. Make a plot of this density as a function of temperature for $0\text{K} \leq T \leq 500\text{K}$. Explain why your plot sets the bar on the lowest possible density of carriers achievable in graphene at those temperatures.

²This may all be very unsettling, but we will explain later why it is actually OK to do so - because with great freedom comes great responsibility! In fact this problem could be formulated for *any* Fermion - for example the uncharged neutron - and the analytical answers will be the same.



Fig. 4070.3: Andre Geim



Fig. 4070.4: Kotsya Novoselov. Geim and Novoselov were awarded the Nobel prize in physics in 2010 for the discovery of graphene, the thinnest 2D crystal with remarkable electron transport properties.

4070.2 HW 2

Posted: 02/18/2017, Due: 02/27/2017

Problem 6: Density of States of Electrons, Photons, and Phonons

(a) Show that for a parabolic bandstructure for electrons $E(k) = E_c + \frac{\hbar^2 k^2}{2m^*}$ with band edge E_c and effective mass m^* , the DOS for electron motion in d dimensions is

$$g_d(E) = \frac{g_s g_v}{2^d \pi^{\frac{d}{2}} \Gamma(\frac{d}{2})} \left(\frac{2m^*}{\hbar^2} \right)^{\frac{d}{2}} (E - E_c)^{\frac{d}{2} - 1}, \quad (4070.2)$$

where g_s is the spin degeneracy, and g_v is the valley degeneracy. Here $\Gamma(\dots)$ is the Gamma function with property $\Gamma(x+1) = x\Gamma(x)$ and $\Gamma(\frac{1}{2}) = \sqrt{\pi}$. You may need the expression for the surface area of a d -dimensional sphere in k -space: $S_d = \frac{2\pi^{\frac{d}{2}} k^{d-1}}{\Gamma(\frac{d}{2})}$. Check that this reduces to the surface area of a sphere for $d=3$ and the circumference of a circle for $d=2$.

(b) Sketch the DOS for 3D, 2D, and 1D electron systems using the expression. Explain the roles of the valley degeneracy and the effective mass for Silicon and compound semiconductors.

(c) Show that the DOS for energy dispersion $E(k) = \hbar v k$ for 3 dimensions is

$$g_\omega(\omega) = \frac{g_p \omega^2}{2\pi^2 \hbar v^3}, \quad (4070.3)$$

where $\omega = vk$, and g_p is the polarization degeneracy. This is the dispersion for waves, such as photons and phonons moving with velocity v . The parabolic DOS of phonons and photons will play an important role in the thermal and photonic properties of semiconductors.



Fig. 4070.5: Arnold Sommerfeld introduced the quantum electron theory of the metal, and resolved the discrepancies of the Drude model. Was the advisor of a large cohort of Nobel prize winners, but was never awarded in spite of being nominated ~ 80 times!

Problem 7: Sommerfeld's Coup

(a) Using the DOS you calculated in Problem 4070.6, find the *total energy* of N electrons in volume V at $T=0$ K for 3D, 2D, and 1D electron gases with parabolic energy dispersion. Note that you already solved the 3D electron gas problem in Problem 4070.4.

(b) Now for the heat capacity $c_v = \frac{1}{V} \frac{dU}{dT}$, we need to find the total energy U at a non-zero temperature T . To do that, you can still use the fact that heating a bunch of electrons will not increase or decrease their number. Show³ that for 3D electrons, the Fermi energy changes with temperature as

$$E_F(T) = E_F(0) \left[1 - \frac{1}{3} \left(\frac{\pi k_B T}{2E_F(0)} \right)^2 \right], \quad (4070.4)$$

(c) Show that the heat capacity of 3D 'quantum' electrons is then

$$c_v = \frac{\pi^2}{2} n k_B \frac{k_B T}{E_F(0)} \quad (4070.5)$$

³This is somewhat hard, but Sommerfeld did it ~ 100 years ago!

(d) By comparing this form of the electron heat capacity with Drude's result $c_v = \frac{3}{2} n k_B$, can you explain why the heat capacity of the 'quantum' electrons is so much smaller than

the ‘classical’ electrons?

Problem 8: Quantum 2D Free Electrons in a Magnetic Field

Consider a 2D free electron gas confined to the x-y plane. In the Sommerfeld model, the energy of an electron with wavevector \mathbf{k} is $E(\mathbf{k}) = \frac{\hbar^2 k^2}{2m_e}$, and the velocity is $\mathbf{v}(\mathbf{k}) = \frac{1}{\hbar} \nabla_{\mathbf{k}} E(\mathbf{k}) = \frac{\hbar \mathbf{k}}{m_e}$. Now suppose a DC magnetic field $\mathbf{B} = B_0 \mathbf{z}$ is switched on in the z-direction, as shown in Figure 4070.6.

In the presence of the magnetic field, because of the Lorentz force, the momentum of the electron satisfies the equation (assuming no electric field and no scattering)

$$q\mathbf{v}(\mathbf{k}) \times \mathbf{B} = \hbar \frac{d\mathbf{k}}{dt}, \quad (4070.6)$$

which is the quantum version of Newton’s law, with the Lorentz force.

(a) In the k-space, if the starting position of the electron (before the magnetic field was switched on) is at $(k_{x0}, 0)$ as shown in Figure 4070.7, then find the trajectory of the electron in the \mathbf{k} -space after the magnetic field has been switched on. Plot the trajectory in the \mathbf{k} -space.

(b) Continuation of part (a): If in addition, the starting position of the electron (before the magnetic field was switched on) in real space is at $(x_0, 0)$ as shown in Figure 4070.8, then find the trajectory of the electron in real-space after the magnetic field has been switched on and plot it in the real space.

(c) If you did parts (a) and (b) correctly, you would have found that the motion of electron in both k-space and real space is *periodic*. Find the time period for the motion (i.e. the time taken by the electron to complete one period).

(d) Starting from the equation 4070.6, prove that the energy of the electron is conserved (i.e. does not change) during its motion. Hint: The proof is just 1-2 lines of math.

(e) If instead of one electron, there were many, Before the magnetic field was switched the total current carrier by the electron gas (summing up contributions from all electrons) was given by

$$\mathbf{J} = 2q \int \frac{d^2k}{(2\pi)^2} f(\mathbf{k}) \mathbf{v}(\mathbf{k}) = 0, \quad (4070.7)$$

where $f(\mathbf{k})$ was the equilibrium Fermi-Dirac distribution for electrons. Find the total current carried by the electron gas *after* the magnetic field has been switched on and explain your answer.

Problem 9: The Elusive Bloch Oscillator

In a fictitious 2-Dimensional crystal, the bandstructure of the lowest band with a square lattice (lattice constant a) is given by

$$E(k_x, k_y) = -E_0 \cdot [\cos k_x a + \cos k_y a]. \quad (4070.8)$$

- Make a semi-quantitative contour plot of constant energies in the reduced Brillouin Zone, and highlight energies $E = 0, \pm E_0$.
- Make a semi-quantitative plot of the effective mass in the (1,0) or x -direction, and the (2,1) direction in the reduced Brillouin Zone.

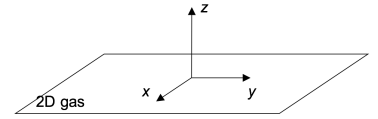


Fig. 4070.6: 2D Electron in a Perpendicular Magnetic Field

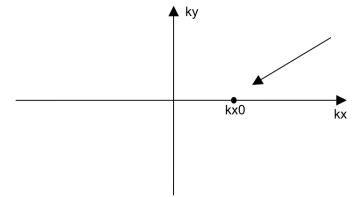


Fig. 4070.7: 2D Electron k -space

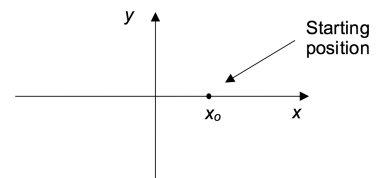


Fig. 4070.8: 2D Electron real space

- c) An electron is initially located at $\mathbf{k} = 0$ in \mathbf{k} -space, and $\mathbf{r} = 0$ is real space. At $t = 0$, a force \mathbf{F} (from an electric field) is turned on which points in an oblique direction, such that $F_x = 2F_y$. Show the trajectory of the electron through the reduced zone in the \mathbf{k} -space, including umklapp processes, for the time interval $0 \leq t \leq 4T$, where

$$T = \frac{\pi \hbar}{aF_x} \tag{4070.9}$$

⁴If you have done the problem correctly, you will realize that *very mysteriously*, the electron is oscillating in real space in the presence of an *Electric* field! A DC electric field will lead to ac oscillation power - this idea is called a Bloch oscillator. The actual implementation has remained elusive in semiconductor quantum structures. They promise very high frequency (THz) output power, only if someone can make them!

- d) Calculate and plot the x- and y-components of the velocity and the position of the electron, all functions of time, for $0 \leq t \leq 4T$.
- e) Make a graph of the trajectory of the electron in the x-y plane of real space.
- f) Explain the phenomena in words. ⁴

Problem 10: Electrons get their Bands and Gaps

As shown in Figure 4070.9, in the \mathbf{k} -space of a 2D square lattice (lattice constant: a), denote the points $\Gamma : (k_x, k_y) = (0,0)$, $X : (\pi/a, 0)$, and $W : (\pi/a, \pi/a)$. The nearly free electron bandstructure assumes no crystal potential, but a lattice.

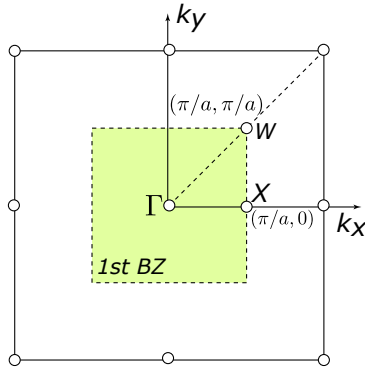


Fig. 4070.9: 2D reciprocal lattice.

- (a) Draw the nearly free-electron bandstructure from the BZ center in the $\Gamma - W$ direction slightly beyond the BZ edge. Identify the magnitude of k at the BZ edge, and express the energy in terms of $F = \hbar^2 \pi^2 / ma^2$. Include reciprocal lattice vectors smaller than $2 \times 2\pi/a$.

- (b) Label each band with the reciprocal lattice vector it is associated with. Clearly point out the *degeneracies* of each band.

Consider now that the basis atoms produce a 2-D potential

$$V(x, y) = -4V_0 \cos\left(\frac{2\pi x}{a}\right) \cos\left(\frac{2\pi y}{a}\right). \tag{4070.10}$$

- (c) Find the bandgap at the W point due to this potential. Be judicious in choosing the basis set.
- (d) The lowest energy at the $\Gamma : (k_x, k_y) = (0, 0)$ point *before* the potential was turned on was $E_\Gamma(0, 0) = 0$ eV. Give an estimate of the change in this energy eigenvalue due to the periodic potential.

4070.3 HW 3

Posted: 03/02/2017, Due: 03/14/2017

Problem 11: Wigner-Seitz Cells and the Reciprocal Lattice

Figure 4070.10 shows the arrangement of atoms of a fictitious 2-dimensional crystal. All circles (filled and empty) represent the same atom.

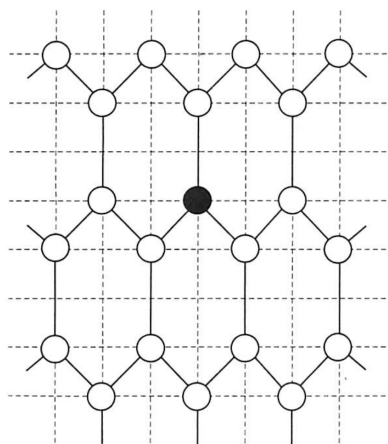


Fig. 4070.10: Atomic arrangement of a fictitious 2-dimensional crystal.

- a) Using the filled ‘atom’ shown in black as the origin of the lattice, indicate the primitive translation vectors of this lattice. (There are several possible choices; use the simplest one, and explain.) How many atoms are there per lattice point?

- b) Determine the reciprocal lattice vectors corresponding to this lattice, and sketch the reciprocal lattice as accurately as you can. Use the grid lines shown as an unit of measure.

c) Construct and show the 'Wigner-Seitz cell', or equivalently, the Brillouin zone clearly in the reciprocal lattice plot.

Problem 12: Energy Gap from a Square Wave Potential

#15•2-1: Energy Gap of a Square-Wave Periodic Potential

Using second-order Brillouin-Wigner perturbation theory, calculate the energy gap of a square-wave potential with the amplitude $\Delta V = F$, where F is again given by (14•3-17).

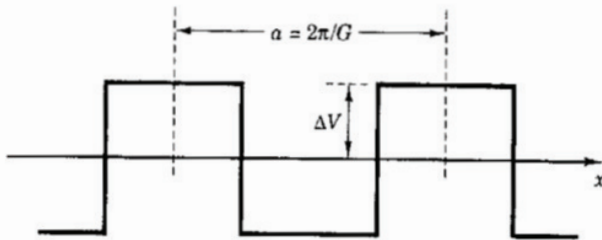


Fig. 4070.11: Square-wave perturbation to the particle in a box problem.

See Fig 4070.11. This problem is from Kroemer's QM Textbook. Note that the equation referred to is $F = \hbar^2 G^2 / 8m_e$, the free-electron unperturbed energy at the Brillouin-zone edge. The given perturbation potential is applied on the *free electron*. Also test with the Rayleigh-Schrodinger (RS) approximation for the 2nd order energy corrections. Is the RS approximation a good one for this problem?

Problem 13: This crystal has no atoms! The Empty Lattice Band-structure

a) Impossibility of indirect bandgaps in ideal 1D crystals: Argue why in an ideal 1D crystal, energy degeneracies (or band crossings) can *only* occur at $k = 0$ or at the Brillouin Zone edges, but never at any other k points. Since degeneracy points lead to bandgaps, what does this say about ideal 1D semiconductors: will they be direct or indirect bandgap? What about 2D and 3D crystals?

b) Now consider the ideal 2D crystal of graphene shown in Figure 4070.12. Identify the primitive real-space lattice vectors ($\mathbf{a}_1, \mathbf{a}_2$). Find the primitive reciprocal lattice vectors ($\mathbf{b}_1, \mathbf{b}_2$). The general reciprocal lattice vector may be written as $\mathbf{G} = n\mathbf{b}_1 + m\mathbf{b}_2$, written more compactly as (n, m) .

c) Starting from the expression for the energy bandstructure of the empty lattice model $\mathcal{E}(\mathbf{k}) = \frac{\hbar^2(\mathbf{k}+\mathbf{G})^2}{2m_0}$, draw up a table with expressions of energy bands along the k_x and k_y directions. Associate each band with the respective (n, m) reciprocal lattice vector.

d) Plot the empty-lattice bandstructure along $(k_x, 0)$ for (n, m) : $(0,0)$ through $(2, 2)$ with all possible (\pm) combinations. Also make a 2D plot of the energy bandstructure. Superimpose and compare with the known bandstructure of graphene and comment.

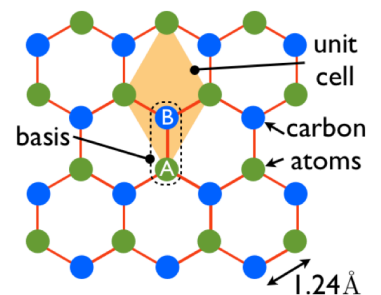


Fig. 4070.12: Atoms in the Graphene Crystal.

e) Do the same as in the previous problem, but for 3D Silicon (see Figure 4070.13). Use the diamond cubic crystal structure (you have 3 reciprocal lattice vectors). Plot the energy bands along the typical high-symmetry directions in the k-space. Superimpose and compare with the known bandstructure of Silicon and comment.

Diamond lattice (Si, Ge, Diamond)

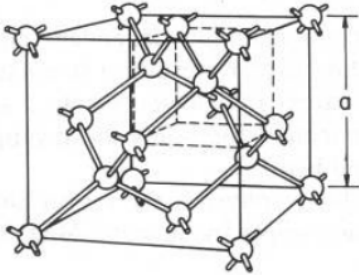


Fig. 4070.13: Atoms in the Silicon Crystal.

Problem 14: Energy Bandstructure of 2D Graphene and BN

In this problem, we will quantitatively calculate the electronic bandstructure for 2D graphene and 2D Boron Nitride as our first ‘elemental’ and ‘compound’ semiconductors respectively.

a) Show that if the energies allowed for the electron in individual atoms A and B are E_A and E_B , and the lowering of energy because of hopping of the electron between the atoms is U , the energies allowed for the electron after the formation of a chemical bond are $E_{\pm} = \frac{E_A + E_B}{2} \pm \sqrt{\left(\frac{E_A - E_B}{2}\right)^2 + U^2}$. Because each allowed electron state can hold *two* electrons of opposite spins, what is the *lowering* of energy due to the formation of the bond?

b) Now consider 2D Boron Nitride (or graphene), whose atomic basis has *two* atoms: B & N for BN (and C & C for graphene). We saw in class that the whole 2D crystal may be generated by repeating this two-atom basis, by translating by the two primitive lattice vectors $\mathbf{a}_1 = a\left(\frac{3}{2}, \frac{\sqrt{3}}{2}\right)$ and $\mathbf{a}_2 = a\left(\frac{3}{2}, -\frac{\sqrt{3}}{2}\right)$, where a is the distance between the A and B atoms. Sketch the basis, the lattice, and these vectors, and show that the three vectors from any atom to the three nearest neighbors are $\mathbf{n}_1 = \frac{a}{2}(1, \sqrt{3})$, $\mathbf{n}_2 = \frac{a}{2}(1, -\sqrt{3})$, and $\mathbf{n}_3 = -a(1, 0)$. We will look at only the p_z orbital bands. For on-site orbital energies E_A and E_B and a hopping energy t , show that the off-diagonal (hopping) term is $h(\mathbf{k}) = -t(e^{i\mathbf{k}\cdot\mathbf{n}_1} + e^{i\mathbf{k}\cdot\mathbf{n}_2} + e^{i\mathbf{k}\cdot\mathbf{n}_3})$, and the resulting bandstructure is

$$E_{\pm} = A \pm \sqrt{B^2 + t^2[1 + 4 \cos\left(\frac{3}{2}k_x a\right) \cos\left(\frac{\sqrt{3}}{2}k_y a\right) + 4 \cos^2\left(\frac{\sqrt{3}}{2}k_y a\right)]}, \text{ where } A = \frac{E_A + E_B}{2}$$

and $B = \frac{E_A - E_B}{2}$.

c) Using the following parameters, make 2D plots of the bandstructures of BN and graphene similar to shown in class. For BN: $E_A = +2.9$ eV, $E_B = -2.9$ eV, $t = -2.9$ eV, and $a = 0.15$ nm. For graphene, $E_A = E_B = 0$ eV, $t = 3.0$ eV, $a = 0.15$ nm. Describe the differences and similarities between them. Specifically, find the band-edge *effective masses* and *bandgap* for BN, and the *Fermi velocity* characterizing the slope of the $E - k$ Dirac cone of Graphene. Relate these analytically to the known parameters.

Problem 15: Energy Bandstructure of Silicon and GaAs

In this problem we extend the ideas of the last problem to calculate the tight-binding bandstructure of Silicon and GaAs, which are 3D semiconductors. The procedure is the same, just the matrices are larger. Do not be turned off by the forbidding looking matrix below-it is simpler than you think, and understanding it will put you in a select league! Silicon powers the electronics industry today, and GaAs the photonic industry - they together are the basis of the new information age. And within a month in this course, you are solving the quantum mechanical problem of both crystals! You will be able to get plots like the ones shown in Figures 4070.14 and 4070.15. Because the bandstructure is the allowed electron eigenvalues in the crystal, getting it means you have (almost) completely solved the full quantum mechanical problem of the two semiconductors. Since the bandstructure determines all the electronic and photonic properties of the semiconductor, it should be a memorable event when you get it to work!

Because for graphene and BN we looked at a single $|p_z\rangle$ orbital and a 2-atom basis, the matrix was 2×2 . For Silicon and GaAs, the basis has two atoms too, but attached to each atom will be 4 orbitals: $|s\rangle, |p_x\rangle, |p_y\rangle, |p_z\rangle$, and the chemical bonding is sp^3 . Thus, to get the energy bandstructure we have to solve a 8×8 matrix numerically.

a) Sketch the crystal structure, the atomic basis, and the nearest neighbor vectors $\mathbf{n}_1 = \frac{a}{4}(1, 1, 1)$, $\mathbf{n}_2 = \frac{a}{4}(-1, -1, 1)$, $\mathbf{n}_3 = \frac{a}{4}(-1, 1, -1)$, $\mathbf{n}_4 = \frac{a}{4}(1, -1, -1)$, where a is the lattice constant (\neq nearest neighbor distance!). Sketch the orbitals centered at each site and identify the overlaps, and the angles between them.

b) Because of various orbital overlaps ss , $sp\sigma$, $pp\sigma$ and $pp\pi$, there are multiple hopping terms. Examine the matrix carefully and explain its structure. Specifically, explain all the diagonal terms, and the zeroes. Then explain the non-zero off-diagonal terms by invoking symmetries, geometries, and orbital overlaps.

$$\begin{pmatrix} \langle s^A | \\ \langle p_x^A | \\ \langle p_y^A | \\ \langle p_z^A | \\ \langle s^B | \\ \langle p_x^B | \\ \langle p_y^B | \\ \langle p_z^B | \end{pmatrix} \begin{pmatrix} |s^A\rangle & |p_x^A\rangle & |p_y^A\rangle & |p_z^A\rangle & |s^B\rangle & |p_x^B\rangle & |p_y^B\rangle & |p_z^B\rangle \\ E_s^A & 0 & 0 & 0 & -V_0g_0(\mathbf{k}) & V_1g_1(\mathbf{k}) & V_1g_2(\mathbf{k}) & V_1g_3(\mathbf{k}) \\ 0 & E_p^A & 0 & 0 & -V_1g_1(\mathbf{k}) & V_2g_0(\mathbf{k}) & V_3g_3(\mathbf{k}) & V_3g_2(\mathbf{k}) \\ 0 & 0 & E_p^A & 0 & -V_1g_2(\mathbf{k}) & V_3g_3(\mathbf{k}) & V_2g_0(\mathbf{k}) & V_3g_1(\mathbf{k}) \\ 0 & 0 & 0 & E_p^A & -V_1g_3(\mathbf{k}) & V_3g_2(\mathbf{k}) & V_3g_1(\mathbf{k}) & V_2g_0(\mathbf{k}) \\ \text{c.c.} & \text{c.c.} & \text{c.c.} & \text{c.c.} & E_s^B & 0 & 0 & 0 \\ \text{c.c.} & \text{c.c.} & \text{c.c.} & \text{c.c.} & 0 & E_p^B & 0 & 0 \\ \text{c.c.} & \text{c.c.} & \text{c.c.} & \text{c.c.} & 0 & 0 & E_p^B & 0 \\ \text{c.c.} & \text{c.c.} & \text{c.c.} & \text{c.c.} & 0 & 0 & 0 & E_p^B \end{pmatrix}, \quad (4070.11)$$

where c.c. stands for the complex conjugate (e.g. $H_{51} = H_{15}^*$). The constants in this matrix are

$$\begin{aligned} V_0 &= V_{ss\sigma}, \\ V_1 &= \frac{1}{\sqrt{3}}V_{sp\sigma}, \\ V_2 &= \frac{1}{3}V_{pp\sigma} - \frac{2}{3}V_{pp\pi}, \text{ and} \\ V_3 &= \frac{1}{3}V_{pp\sigma} + \frac{1}{3}V_{pp\pi}, \end{aligned}$$

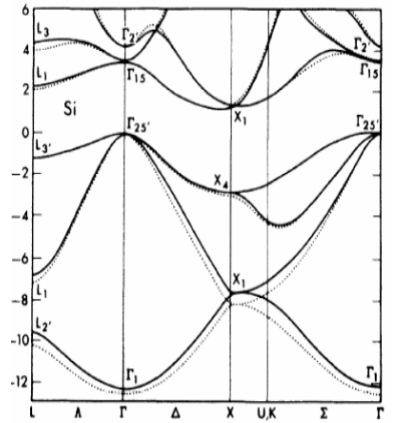
and the nearest neighbor 'hopping' phases are

$$\begin{aligned} g_0(\mathbf{k}) &= e^{i\mathbf{k}\cdot\mathbf{n}_1} + e^{i\mathbf{k}\cdot\mathbf{n}_2} + e^{i\mathbf{k}\cdot\mathbf{n}_3} + e^{i\mathbf{k}\cdot\mathbf{n}_4}, \\ g_1(\mathbf{k}) &= e^{i\mathbf{k}\cdot\mathbf{n}_1} - e^{i\mathbf{k}\cdot\mathbf{n}_2} - e^{i\mathbf{k}\cdot\mathbf{n}_3} + e^{i\mathbf{k}\cdot\mathbf{n}_4}, \\ g_2(\mathbf{k}) &= e^{i\mathbf{k}\cdot\mathbf{n}_1} - e^{i\mathbf{k}\cdot\mathbf{n}_2} + e^{i\mathbf{k}\cdot\mathbf{n}_3} - e^{i\mathbf{k}\cdot\mathbf{n}_4}, \text{ and} \\ g_3(\mathbf{k}) &= e^{i\mathbf{k}\cdot\mathbf{n}_1} + e^{i\mathbf{k}\cdot\mathbf{n}_2} - e^{i\mathbf{k}\cdot\mathbf{n}_3} - e^{i\mathbf{k}\cdot\mathbf{n}_4} \end{aligned}$$

for the 4 nearest neighbors. The eigenvalue spectrum of the 8×8 matrix above yields the bandstructure $E(\mathbf{k})$ of Silicon, GaAs, and all 3D semiconductors of the diamond-cubic or zinc-blende families. The electron wavevector $\mathbf{k} = (k_x, k_y, k_z)$ is three dimensional: the electron energy depends on the direction it moves.

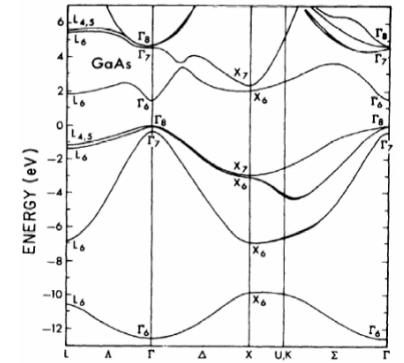
c) Set up the matrix above in Mathematica, Matlab, Python (or any tool you love!) to plot the energy bandstructure $E(k)$ for k from $\mathbf{L} \leftrightarrow \Gamma \leftrightarrow \mathbf{X} \leftrightarrow \mathbf{K} \leftrightarrow \Gamma$. For Silicon, $E_s^A = E_s^B = -13.55$ eV, $E_p^A = E_p^B = -6.52$ eV, $V_{ss\sigma} = +2.03$ eV, $V_{sp\sigma} = +2.55$ eV, $V_{pp\sigma} = +4.55$ eV, $V_{pp\pi} = +1.09$ eV, and $a = 0.543$ nm.

d) Repeat the bandstructure plot for our first 3D compound semiconductor: GaAs! Use $E_s^{Ga} = -11.37$ eV, $E_s^{As} = -17.33$ eV, $E_p^{Ga} = -4.9$ eV, $E_p^{As} = -7.91$ eV, $V_{ss\sigma} = +1.70$



Silicon Energy Bands
(Chelikowski and Cohen, 1976)

Fig. 4070.14: Bandstructure of Silicon.



GaAs Energy Bands
(Chelikowski and Cohen, 1976)

Fig. 4070.15: Bandstructure of GaAs.

eV, $V_{sp\sigma} = +2.15$ eV, $V_{pp\sigma} = +3.44$ eV, $V_{pp\pi} = +0.89$ eV, and $a = 0.565$ nm. If you have worked your way to this stage, congratulations, your early hard work will pay off handsomely in the course.

e) From the 8×8 LCAO bandstructure matrix of GaAs, show that for the Γ point with $\mathbf{k} = 0$, the eight eigenvalues can be calculated analytically. Then prove that for GaAs, the conduction band edge state is at $E_c(\Gamma) = \frac{E_s^{Ga} + E_s^{As}}{2} + \sqrt{(\frac{E_s^{Ga} - E_s^{As}}{2})^2 + (4V_{ss\sigma})^2}$ composed of $|s\rangle$ orbital overlap between the Ga and As atoms, and no $|p\rangle$ orbitals are involved.

f) Similarly, show that for the states at the top of the valence band at the Γ point, only $|p\rangle$ orbitals are involved with no $|s\rangle$ orbital involvement. Use this property to argue why holes are anisotropic in most compound semiconductors, but electrons are isotropic.

4070.4 HW 4

Posted: 03/19/2017, Due: 03/29/2017

Problem 16: The deep-acceptor problem and the 2014 Physics Nobel Prize




Fig. 4070.16: The 2014 Physics Nobel Prize went to the researchers who solved the p-type doping problem in GaN. This work made quantum well blue LEDs and Lasers and LED lighting possible.

a) Show that for a homogeneous semiconductor with electron mobility μ_n and hole mobility μ_p , the lowest conductivity that can be achieved at thermal equilibrium is $\sigma_{min} = 2qn_i\sqrt{\mu_n\mu_p}$, irrespective of the donor or acceptor doping.

Magnesium is a relatively deep acceptor in the wide bandgap semiconductor GaN. The acceptor ionization energy is $E_A \sim 160$ meV. Consider a GaN sample ($E_g = 3.4$ eV, $m_c^* \sim 0.2m_0$, $m_v^* \sim 1.4m_0$) doped with $N_A = 10^{18}/\text{cm}^3$ Magnesium acceptors. In the process of doping this sample with Magnesium, unintentional donors of density $N_D = 10^{14}/\text{cm}^3$ of donor ionization energy $E_D = 10$ meV also incorporate into the semiconductor.

b) For $T=300\text{K}$, Plot the log of n , p , N_A^- , N_D^+ , $n + N_A^-$, and $p + N_D^+$ as a function of the Fermi level E_F . Remember the Fermi level can be within the gap, or in the conduction or valence bands. So in your plot vary the values of E_F from below E_c to above E_c . Indicate the donor and acceptor ionization energies and show in the plot where the real Fermi level at 300K is. Explain.

c) What are the densities and types of mobile carriers in the sample at 300K? Is the sample n- or p-type? Find the conductivity of the sample at 300K if the electron mobility is $\mu_n \sim 1000 \text{ cm}^2/\text{V}\cdot\text{s}$ and the hole mobility is $\mu_p \sim 10 \text{ cm}^2/\text{V}\cdot\text{s}$.

d) Do an online research of the connection between the p-type doping problem of wide-bandgap semiconductors and the 2014 Physics Nobel prize and write a short summary of what you find.

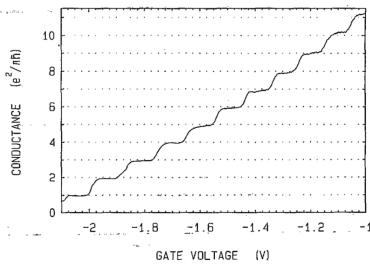


Fig. 4070.17: Experimental evidence of conductance quantization measured in an AlGaAs/GaAs quantum well structure with N parallel quantized conductors from 1998. The number of 1D conductors or subbands could be tuned by a gate voltage.

Problem 17: Electric Current Flow in Semiconductor Crystals

In class, we have seen that the quantum mechanical current carried by Bloch states is found easily by using the concept of the **group velocity** which is obtained directly from the bandstructure $E(k)$. The second important concept of current flow is how the k -states are filled/emptied by metal contacts which are reservoirs of electrons, and determine the quasi-Fermi levels of the $|k\rangle$ states in the semiconductor. In this problem, you will gain practice in applying these concepts to find the quantum mechanical electric current in

various situations.

a) Show that the ballistic conductance $G = I/V$ in any 1D metal or semiconductor at a low voltage V and at a low temperature $qV \ll k_b T$ is given by the *quantum of conductance*

$G_0 = g_s g_v \frac{q^2}{h}$, where g_s is the spin degeneracy and g_v the valley degeneracy of the 1D band, q is the electron charge, and h is Planck's constant. In your derivation, show that rather remarkably this result is *independent* of the exact nature of the bandstructure! If there are N parallel 1D conductors or N uncoupled 1D bands, then the total conductance is NG_0 .

b) Electrons sit in the n_z state of a heterostructure 2D quantum well of length L_z and infinite depth in the z -direction and are free to move in an area $L_x L_y$ in the $x-y$ directions. The energy bandstructure is $E(k_x, k_y) = \frac{\hbar^2(k_x^2 + k_y^2)}{2m^*}$. Show that the probability current density for state $|\mathbf{k}\rangle = (k_x, k_y, k_{n_z})$ is the following:

$$\mathbf{j}(k_x, k_y, k_{n_z}) = \frac{1}{L_x L_y} \cdot \left[\frac{\hbar}{m^*} (k_x \hat{x} + k_y \hat{y}) \right] \cdot \frac{2}{L_z} \sin^2(k_{n_z} z). \quad (4070.12)$$

c) Provide an expression for k_{n_z} and explain the result. Integrate the z -component to show that the 2D probability current is in the form $\mathbf{j}_{2d}(\mathbf{k}) = \frac{1}{L^d} \mathbf{v}_g(\mathbf{k})$, where $\mathbf{v}_g(\mathbf{k}) = \frac{1}{\hbar} \nabla_{\mathbf{k}} E(\mathbf{k})$ is the group velocity. This is a more general result that applies also for particles that may appear 'massless'.

d) Now fill the quantum well (k_x, k_y) states so that the 2D carrier sheet density is n_s . This defines a Fermi level E_F : find how n_s is related to E_F at any temperature. Also, what happens to E_F if $\hbar \rightarrow 0$? Why?

e) Find the current per unit width flowing in the $+x$ direction as a function of temperature and n_s . Assume a spin degeneracy g_s and valley degeneracy g_v for each \mathbf{k} -state. This is of course equal to the current flowing in the $-x$ direction. Find the magnitude of the current density for $m^* \sim 0.2m_0$ and $n_s \sim 10^{13}/\text{cm}^2$, $g_s = 2$, and $g_v = 1$ (these values are typical for GaN transistors; g_v is larger for Silicon MOSFETs).

f) In some 2D semiconductors such as graphene, the energy bandstructure is not parabolic, but conical: $E(k_x, k_y) = \hbar v_F \sqrt{k_x^2 + k_y^2}$, where v_F is a characteristic 'Fermi' velocity. Find the $+x$ directed current per unit width for graphene as a function of temperature. Find the magnitude of the current per unit width for $v_F \sim 10^8$ cm/s, $n_s \sim 10^{13}/\text{cm}^2$, and $g_s = 2$, and $g_v = 2$, the values for 2D graphene.

Problem 18: To gap or not to gap, that is the question

A fictitious 2D semiconductor⁵ has an energy dispersion $E(\mathbf{k}) = \pm \hbar v_F \sqrt{|\mathbf{k}|^2 + k_0^2}$, where $\mathbf{k} = (k_x, k_y)$, \hbar is the reduced Planck's constant, v_F a characteristic velocity, and k_0 is a constant. Assume a spin degeneracy g_s and valley degeneracy g_v .

a) Find the energy bandgap E_g , and show that the effective mass m_{xx} at the band edge is related to the bandgap by $2m_{xx}v_F^2 = E_g$. Argue that if k_0 is externally tunable with a gate, the bandstructure of this material can be made to look like graphene and its gap can be made zero.

b) Find and sketch the density of states.

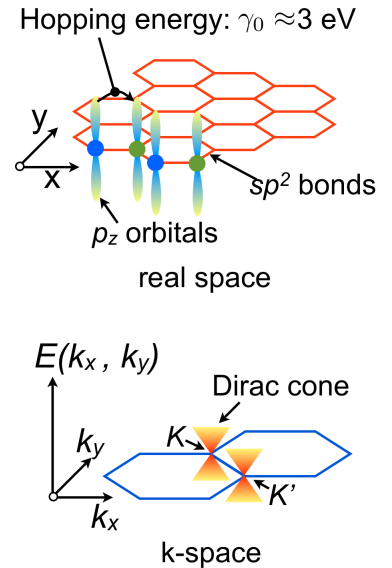


Fig. 4070.18: Dirac cone bandstructure of graphene.

⁵Actually this is not fictitious any more - recently 2D crystal semiconductors with a broken symmetry in the direction perpendicular to the 2D plane have been discovered such as Silicene and Germanene - atomically thin versions of Silicon and Germanium that have this sort of a bandstructure. They have rather interesting *topological* properties that we are skipping in this course.

c) Find the group velocity $\mathbf{v}_g(\mathbf{k})$ of the state \mathbf{k} . Sketch the magnitude and direction of the group velocities in the \mathbf{k} -space.

d) Now the conduction band of this 2D semiconductor sheet is connected by ohmic contacts to a source and a drain. A voltage V is applied across these two terminals. Set up the expressions that will give the ballistic current in response to the applied voltage.

e) The temperature is held very low, $T \rightarrow 0$ K. Estimate the ballistic current as a function of voltage if $qV \gg \hbar v_F k_0$.

Problem 19: Velocity saturation in Nanotubes and Semiconductors

a) If high energy electrons collide with the lattice and emit optical phonons at a very fast rate, they come to equilibrium with the lattice rather than the source and drain electrodes. Assume we have a metallic carbon nanotube that has a 1D energy dispersion $E(k) = \hbar v_F |k|$ with a spin degeneracy of $g_s = 2$ and a valley degeneracy $g_v = 2$. Show that if the optical phonon energy is $\hbar\omega_{op}$ and the above ultrafast optical phonon emission occurs, then the saturation current in the nanotube is given by $I_{sat} = \frac{qg_s g_v \omega_{op}}{2\pi}$. Find the magnitude of this current for $\hbar\omega_{op} \sim 160$ meV, and compare with experimental data (give references).

b) At low electric fields, the velocity v of electrons in a semiconductor increases linearly with the field F according to $v = \mu F$, where $\mu = q\tau_m/m^*$ is the mobility, τ_m is the momentum scattering time and m^* the electron effective mass. But when the electric field is cranked up, the electron velocity saturates, because the electrons emit optical phonons each of energy $\hbar\omega_{op}$ every τ_E seconds, dumping the energy qFv they gain from the electric field every second. Setting up the equations for the conservation of momentum and energy, and solving for the steady state yields an estimate of this saturation velocity. Show that the saturation velocity obtained by this scheme is $v_{sat} = \sqrt{\frac{\hbar\omega_{op}}{m^*}} \cdot \sqrt{\frac{\tau_m}{\tau_E}}$. Show that for a typical semiconductor for which $\hbar\omega_{op} \approx 60$ meV, $m^* \sim 0.2m_0$, and $\tau_m \sim \tau_E$, the electron saturation velocity is of the order of $\sim 10^7$ cm/s. This is a good rough number for the saturation velocity of most semiconductors.

Problem 20: Quantum Current across a Schottky Junction

The energy band diagram in Figure 4070.19 is of a metal/semiconductor junction of surface barrier height $a\phi_b$. In this problem you will calculate the ballistic (quantum) current flow across this junction as a function of the applied voltage. You will discover that the current is highly rectifying, and is given by $J = J_0(e^{\frac{qV}{k_b T}} - 1)$ - the famous rectifier equation in semiconductor devices. You will solve this problem in its full quantum mechanical glory.⁶

a) If the work function of the metal is $q\phi_M$, what is the work-function of the semiconductor? Why is there a depletion region in the semiconductor?

b) Sketch the distribution of electrons in the conduction band at the depletion edge plane indicated as a function of energy.

c) The semiconductor conduction bandstructure is given by $E(k_x, k_y, k_z) = E_c + \frac{\hbar^2}{2m_c^*}(k_x^2 + k_y^2 + k_z^2)$ where E_c is the band-edge energy, and m_c^* is the conduction band effective mass. Find an expression for the (k_x, k_y, k_z) states at the depletion edge plane that can make it across the barrier. This defines a restricted volume Ω_k in the 3D k -space of electrons. Only electrons in this volume can make it ballistically to the metal.

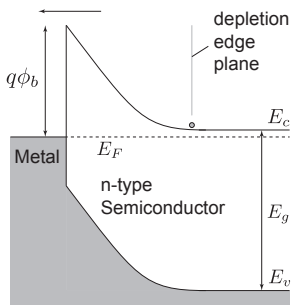


Fig. 4070.19: Schottky Diode

⁶This problem has been solved over the last century by Walter Schottky, Owen Richardson, Arnold Sommerfeld, Ralph Fowler, Lothar Nordheim, Hans Bethe, Nevill Mott, among others. The Schottky diode rectifier is an extremely important semiconductor device, and the rectifying property was one of the earliest to be used in crystal radios, and the earliest pointers to the existence of semiconductors - you can imagine why people have been interested in it for so long!



Fig. 4070.20: Walter Schottky was an early investigator of the metal-semiconductor junction. A semiconductor research institute in Munich is named after him.

d) Now use the expression for the quantum current $\mathbf{J} = \frac{1}{L^3} \sum_{\Omega_k} \mathbf{v}_g(\mathbf{k}) f(k)$ to show that the *net* current as a function of the applied voltage is $J = A^* T^2 e^{-\frac{q\phi_b}{k_b T}} (e^{\frac{qV}{k_b T}} - 1)$, where the prefactor $A^* = \frac{4\pi q k_b^2 m_c^*}{h^3} (1 + \eta)$ is the famous Richardson constant when $\eta \rightarrow 0$; here $\eta = \frac{q\phi_b - qV - (E_c - E_F)}{k_b T}$.

e) The expression for the Schottky diode current is in the form $J = J_0 (e^{\frac{qV}{k_b T}} - 1)$ if $\eta \rightarrow 0$. If the carriers suffer scattering and energy loss in the depletion region, only the carriers closest to the metal-semiconductor junction within a mean-free-path will make it to the metal. Argue why in this ‘diffusive’ limit, $\eta \rightarrow 0$. It is in this limiting form you will find the expression of the Schottky diode current in most books.

f) Assuming $\eta \rightarrow 0$, make a linear and a log-scale plot of J/T^2 vs voltage for a GaAs-metal Schottky diode of barrier height $q\phi_b = 1$ eV and $m_c^* \sim 0.067m_0$ at $T = 300\text{K}$. In the log-plot, indicate the y-axis intercept. Argue why you can use such a plot to experimentally measure the conduction band effective mass m_c^* . How would you measure ϕ_b ?



Fig. 4070.21: Owen Richardson was awarded the 1928 Physics Nobel prize for thermionic emission; the Richardson constant is named after him.